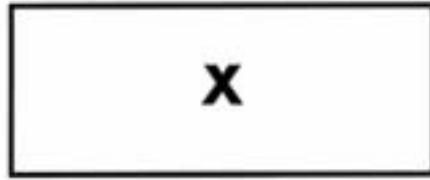


# Lapping the Field

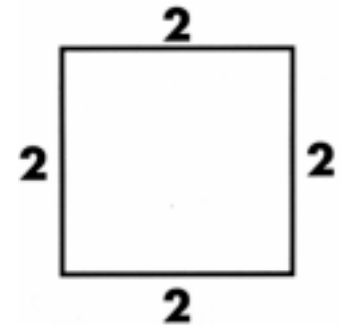
Soccer fields are rectangular. They have 2 long sides and 2 short sides. A square has all sides of equal length. Look at W, X, Y and Z. Color the squares red and the rectangles blue.



## PERIMETER

The perimeter of a shape is the distance around the shape.

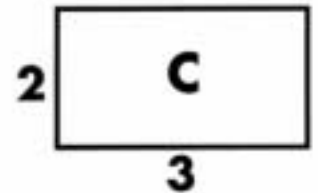
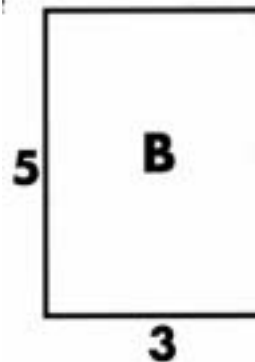

**Example:**



The perimeter of this shape is  $2+2+2+2=8$

Find the perimeter of fields A, B & C?

Put your answer inside each field.



How far would you run if you ran around?

**A and B?**

**A and C?**

**B and C?**

**A, B and C?**